

QUESTION 1

PART A : MULTIPLE CHOICE

Circle the letter that represents the best answer.

1. The safety equipment shown on the right is used for protection of :

- A. Eyes
- B. Ears
- C. Feet
- D. face



2. The name given to drawings done without the help of drawing instruments is

- A. toning.
- B. shading.
- C. rendering.
- D. sketching.

3. The purpose of rendering is to

- A. show the shape of the object.
- B. add realism to the drawing.
- C. decorate the drawing.
- D. record the ideas onto the paper.

4. Which of the following is a good style of lettering


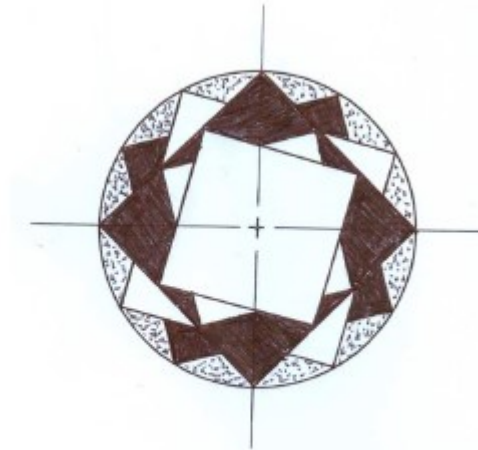
- A. ESTIMaTE
- B. ESTIMATE
- C. ESTIMATE
- D. ESTIMATE

5. Which of the following is a personal safety rule ?

- A. wearing safety shoes
- B. passing sharp tools with handle first
- C. starting a saw with three back strokes
- D. keeping all parts of your body behind the cutting edge

PART B - PATTERN :

Using the centre line provided, reproduce the pattern given below to if the circle is of radius 50

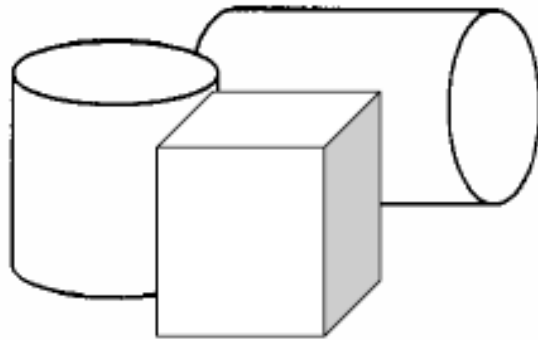


QUESTION 2


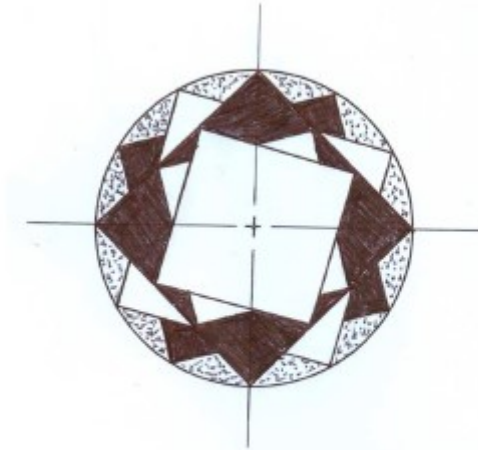
PART A :RENDERING

Use rendering techniques to show the effects of light on the given solids to enable outlines to be seen clearly and effectively..

LIGHT



PART B - ENLARGEMENT



<p>1.</p> 	<p>Name. _____</p> <p>Use. _____</p> <p>_____</p> <p>_____</p>
<p>2.</p> 	<p>Name. _____</p> <p>Use. _____</p> <p>_____</p> <p>_____</p>
<p>3.</p> 	<p>Name. _____</p> <p>Process. _____</p> <p>_____</p> <p>_____</p>
<p>4.</p> 	<p>Name. _____</p> <p>Use. _____</p> <p>_____</p> <p>_____</p>
<p>5.</p> 	<p>Name. _____</p> <p>Use. _____</p> <p>_____</p> <p>_____</p>